


Klasa 2 Dział Porównywanie liczb.


Wynik którego działania jest większy? Wstaw w puste pole odpowiedni znak: < lub >. Odszukaj na kratownicy to działanie i zamaluj kwadrat według podanego wzoru.




$5 + 2$ $6 + 3$




$3 + 5$ $6 + 4$



$7 + 2$ $5 + 3$



$3 + 7$ $4 + 2$




$3 + 2$ $5 + 2$




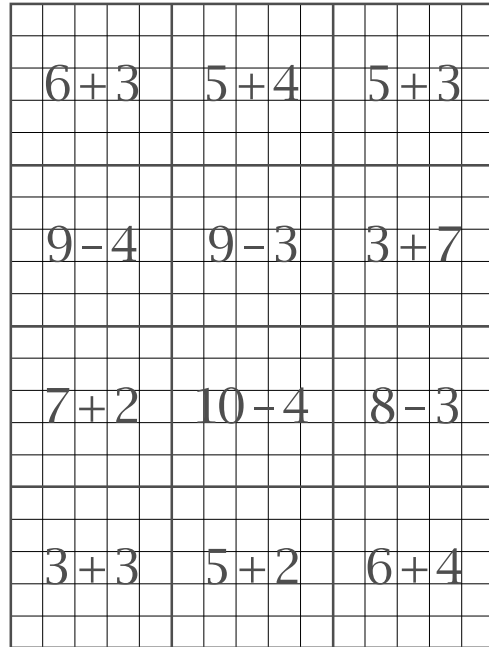
$5 + 4$ $6 + 2$



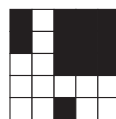
$5 + 3$ $9 - 2$




$6 - 1$ $3 + 3$



$3 + 1$ $8 - 3$



$10 - 4$ $8 - 5$



$8 - 4$ $9 - 3$



$9 - 4$ $8 - 6$

twarz

