



Klasa 1 Dział Porównywanie liczb (wskazywanie największej liczby z podanych).


W każdym przykładzie wskaź największą liczbę. Odszukaj ją na kratownicy i zamaluj kwadrat według podanego wzoru.




3 7 9




1 10 8




16 7 14




8 12 13




20 6 12



1 10 11




0 8 6

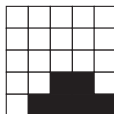


19 18 0

9	12	17
8	13	10
18	6	19
16	11	20




13 15 17



18 17 16



7 12 8



6 0 5

nuty

